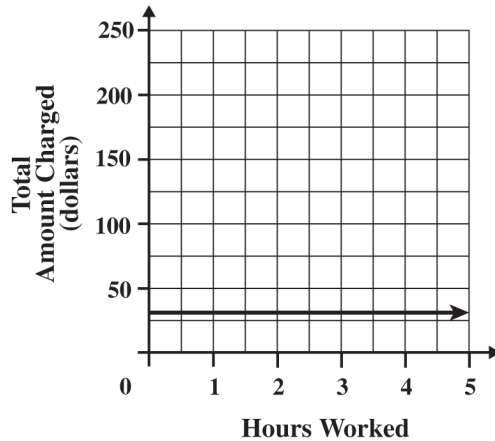


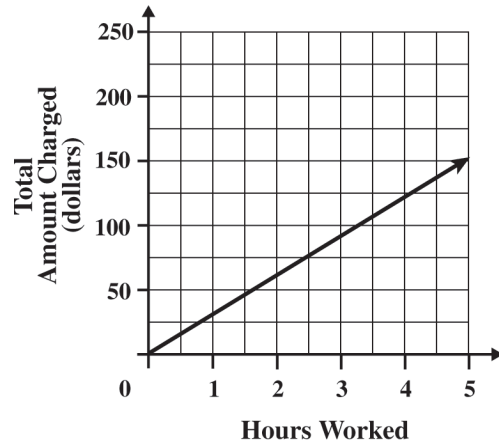
Represent quantitative relationships graphically and interpret the meaning of a specific part of a graph in the situation represented by the graph. 7AF1.5

69. Amy works as a computer consultant. She charges \$30 per hour for her work. Which graph shows the relationship between the number of hours Amy works and the amount of money she charges for her work?

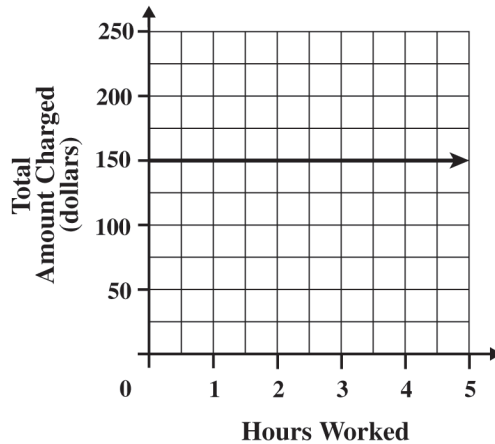
A



C



B



D

